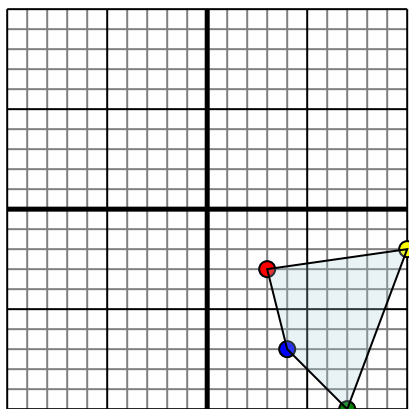




Reflect each shape as described.

1)

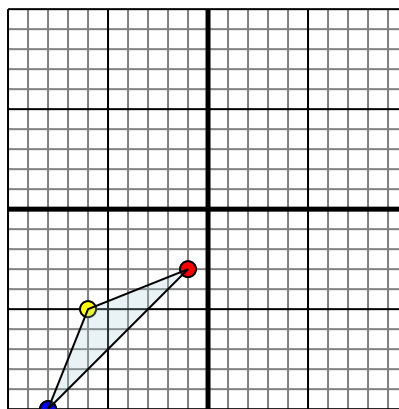


The shape above has the following coordinates:

- A. (3,-3)
- B. (10,-2)
- C. (7,-10)
- D. (4,-7)

Reflect the shape over the X axis.

2)

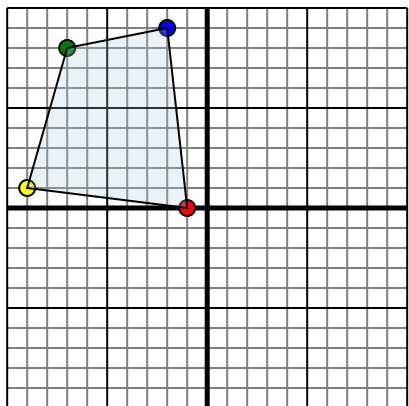


The shape above has the following coordinates:

- A. (-1,-3)
- B. (-6,-5)
- C. (-8,-10)

Reflect the shape over the X axis.

3)

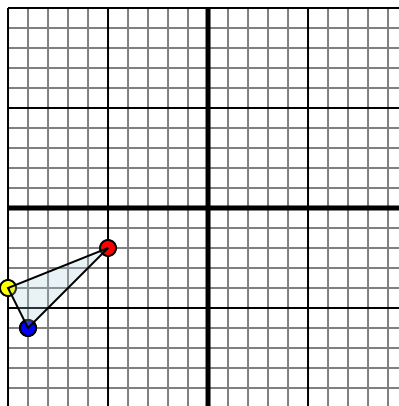


The shape above has the following coordinates:

- A. (-1,0)
- B. (-9,1)
- C. (-7,8)
- D. (-2,9)

Reflect the shape over the X axis.

4)



The shape above has the following coordinates:

- A. (-5,-2)
- B. (-10,-4)
- C. (-9,-6)

Reflect the shape over the Y axis.

Answers

1a. _____

1b. _____

1c. _____

1d. _____

1e. **Graph**

2a. _____

2b. _____

2c. _____

2d. **Graph**

3a. _____

3b. _____

3c. _____

3d. _____

3e. **Graph**

4a. _____

4b. _____

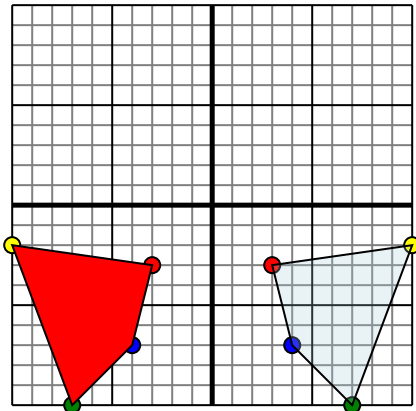
4c. _____

4d. **Graph**



Reflect each shape as described.

1)

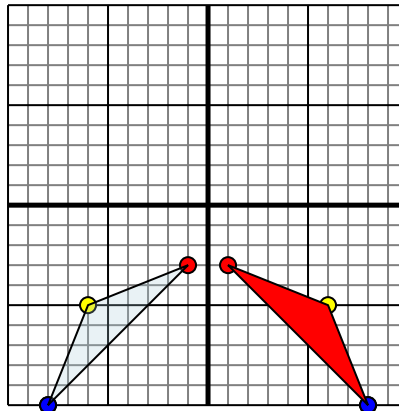


The shape above has the following coordinates:

- A. (3,-3)
- B. (10,-2)
- C. (7,-10)
- D. (4,-7)

Reflect the shape over the X axis.

2)

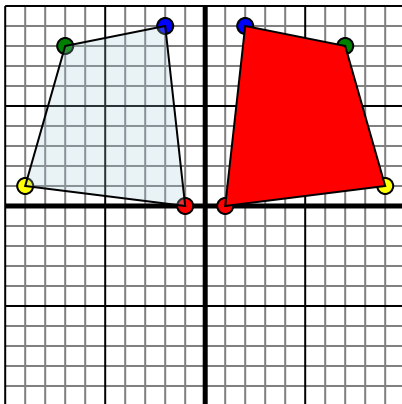


The shape above has the following coordinates:

- A. (-1,-3)
- B. (-6,-5)
- C. (-8,-10)

Reflect the shape over the X axis.

3)

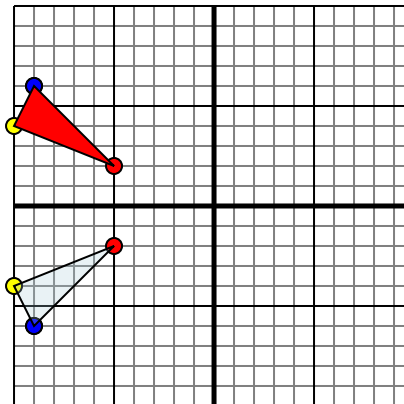


The shape above has the following coordinates:

- A. (-1,0)
- B. (-9,1)
- C. (-7,8)
- D. (-2,9)

Reflect the shape over the X axis.

4)



The shape above has the following coordinates:

- A. (-5,-2)
- B. (-10,-4)
- C. (-9,-6)

Reflect the shape over the Y axis.

Answers1a. **-3,-3**1b. **-10,-2**1c. **-7,-10**1d. **-4,-7**1e. **Graph**2a. **1,-3**2b. **6,-5**2c. **8,-10**2d. **Graph**3a. **1,0**3b. **9,1**3c. **7,8**3d. **2,9**3e. **Graph**4a. **-5,2**4b. **-10,4**4c. **-9,6**4d. **Graph**